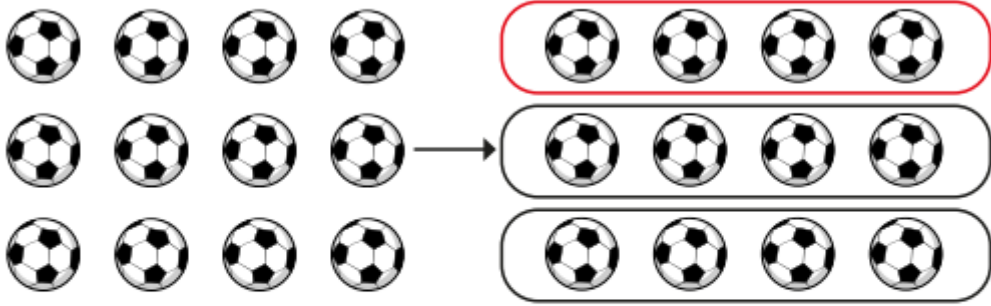


Year 3
Due Friday 15th May

Use the picture to complete the sentences.




The whole is 12 footballs.

The whole is divided into _____ equal parts.

Each part is _____ of the whole.

$\frac{1}{3}$ of _____ footballs is _____ footballs.

Complete the sentences to find $\frac{1}{4}$ of the flowers.



I have divided the flowers into _____ equal groups.

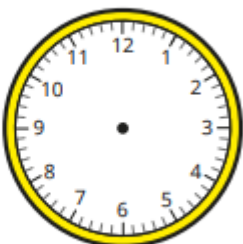
There are _____ flowers in each group.

$\frac{1}{4}$ of _____ flowers is _____ flowers.

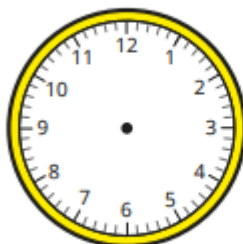
What time is shown on each clock?



Draw hands to show the time on each clock.



10 minutes past 10



25 minutes past 8

Year 4
Due Friday 15th May

Mo saves £80

He spends $\frac{1}{10}$ of this money on a game.

How much does he spend?

Kim has 42 sweets.

She gives $\frac{1}{6}$ of her sweets to a friend.

How many sweets does she have left?

Eva saves £54

She spends $\frac{5}{6}$ of her money on a new game.

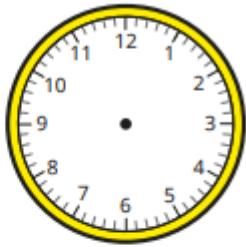
How much does she spend?

Esther has 56 sweets.

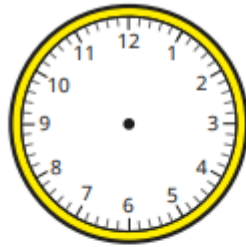
She gives $\frac{3}{8}$ of her sweets to a friend.

How many sweets does she have left?

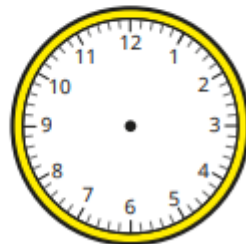
Draw hands to show the time on each clock.



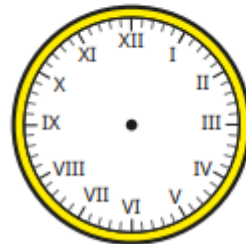
10 minutes past 10



25 minutes past 8



quarter to 4



20 minutes to 10